

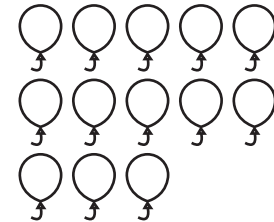


Name: _____

Date: _____

Spring Math Assessment Subtraction within 20




1. Use the pictures to help you solve each problem. Cross out the amount to take away, then count how many are left.



$20 - 3 = \underline{\quad}$

$15 - 4 = \underline{\quad}$



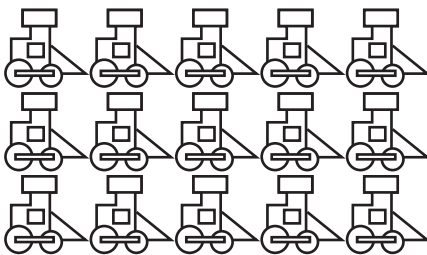
$13 - 3 = \underline{\quad}$



$18 - 5 = \underline{\quad}$

$19 - 7 = \underline{\quad}$


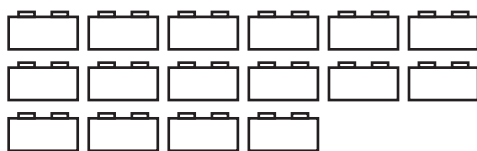
2. Solve the addition problems.



$8 + 7 = \underline{\quad}$

$10 + 9 = \underline{\quad}$

$7 + 7 = \underline{\quad}$



$6 + 10 = \underline{\quad}$

$11 + 2 = \underline{\quad}$