





Spending Money Word Problems




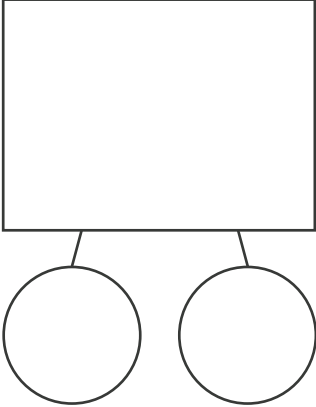

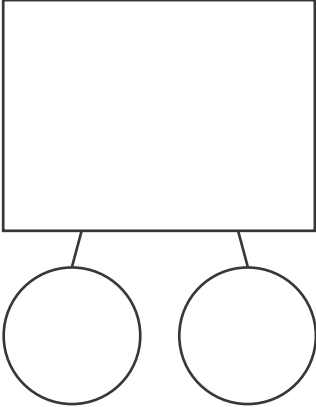
Read the word problems. Then fill out the number bonds to answer the question. Show your work.

Problem	Number Bond	Work Space	Answer
<p>Example: Gloria had 26¢. She gave Penelope 14¢ to buy a chocolate bar. How much did she have left over?</p> 	<div style="border: 1px solid black; width: 100%; height: 100%; display: flex; flex-direction: column; align-items: center; justify-content: center;"> <div style="border: 1px solid black; width: 80%; height: 80%; margin-bottom: 10px; display: flex; align-items: center; justify-content: center;">26¢</div> <div style="display: flex; gap: 20px;"> <div style="border: 1px solid black; border-radius: 50%; width: 40%; height: 40%; display: flex; align-items: center; justify-content: center;">14¢</div> <div style="border: 1px solid black; border-radius: 50%; width: 40%; height: 40%; display: flex; align-items: center; justify-content: center;">?</div> </div> </div>	$\begin{array}{r} 26 \\ -14 \\ \hline 12 \end{array}$	12¢
<p>1. Kieran had 88¢. How much would he have left over if he bought a whistle for 75¢?</p> 	<div style="border: 1px solid black; width: 100%; height: 100%; display: flex; flex-direction: column; align-items: center; justify-content: center;"> <div style="border: 1px solid black; width: 80%; height: 80%; margin-bottom: 10px;"></div> <div style="display: flex; gap: 20px;"> <div style="border: 1px solid black; border-radius: 50%; width: 40%; height: 40%;"></div> <div style="border: 1px solid black; border-radius: 50%; width: 40%; height: 40%;"></div> </div> </div>		
<p>2. Sin-Ku had 94¢. He bought a cookie for 75¢ from the bake sale. How much money did he have left?</p> 	<div style="border: 1px solid black; width: 100%; height: 100%; display: flex; flex-direction: column; align-items: center; justify-content: center;"> <div style="border: 1px solid black; width: 80%; height: 80%; margin-bottom: 10px;"></div> <div style="display: flex; gap: 20px;"> <div style="border: 1px solid black; border-radius: 50%; width: 40%; height: 40%;"></div> <div style="border: 1px solid black; border-radius: 50%; width: 40%; height: 40%;"></div> </div> </div>		

Spending Money Word Problems



Keep going! Read the word problems. Then fill out the number bonds to answer the question. Show your work.

Problem	Number Bond	Work Space	Answer
<p>3. Milo had 55¢. He bought a comic book at a garage sale for 49¢. How much money did he have left over?</p> 			
<p>4. Andrea had 48¢. She bought origami paper from Milo for 25¢. How much money did Andrea have left?</p> 			
<p>5. Norah had 67¢. She bought a raffle ticket at the school fair for 25¢. How much did she have left to spend?</p> 