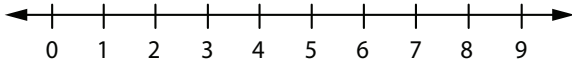


Solving Two-Step Inequalities #1

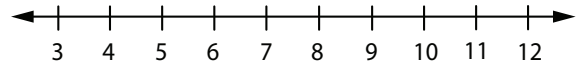


Solve each inequality. Then graph the solution set on the number line.

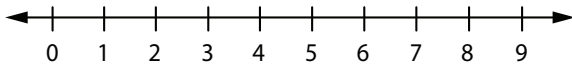
1 $2y + 4 > 10$



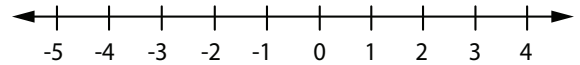
2 $6x - 12 < 30$



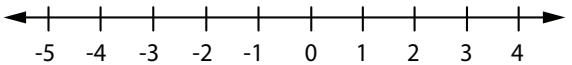
3 $5t - 6 \geq 19$



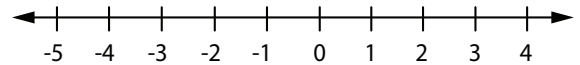
4 $4r + 7 \leq -5$



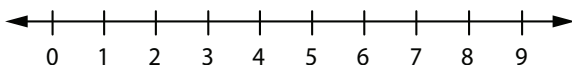
5 $-7w + 4 < 18$



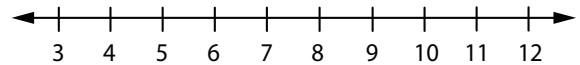
6 $-15m - 30 > -60$



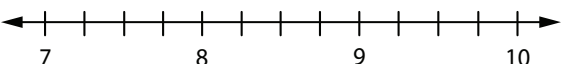
7 $1.75k + 1.25 < 3$



8 $-1.25j + 6.5 \leq -2.25$



9 $2h - 2\frac{1}{2} \geq 14$



10 $\frac{1}{3}n - 2\frac{1}{2} > -5$

