


# Solve One-Step Inequalities #3

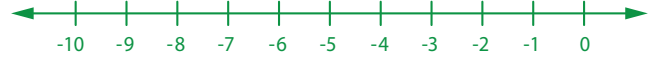
Solve each inequality. Then graph the solution set on the number line.



$$6w < 18$$



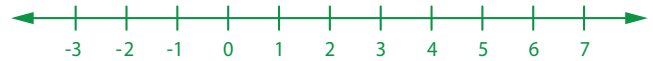
$$b + 5 \geq -2$$



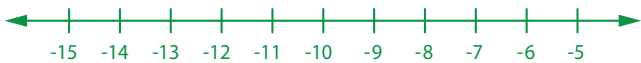
$$\frac{r}{-3} \geq 7$$



$$z - 64 > -58$$



$$9.1 + g \geq -1.9$$



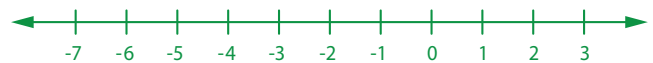
$$4.5s \geq 36$$



$$d + 81 > 23$$



$$-3.2y > 12.8$$



$$\frac{c}{-8} \geq -3$$



$$k - 7.6 > 7.4$$

