





Solar System Subtraction: The 2nd Planet


What's the 2nd planet from the sun? Find out by finding the difference, then using the letters to spell out the name.



$$\begin{array}{r} 52 \\ - 20 \\ \hline \end{array}$$



$$\begin{array}{r} 80 \\ - 80 \\ \hline \end{array}$$



$$\begin{array}{r} 58 \\ - 34 \\ \hline \end{array}$$



$$\begin{array}{r} 97 \\ - 84 \\ \hline \end{array}$$



$$\begin{array}{r} 46 \\ - 21 \\ \hline \end{array}$$



$$\begin{array}{r} 86 \\ - 42 \\ \hline \end{array}$$



$$\begin{array}{r} 75 \\ - 20 \\ \hline \end{array}$$


$$\begin{array}{r} 96 \\ - 44 \\ \hline \end{array}$$


$$\begin{array}{r} 98 \\ - 83 \\ \hline \end{array}$$


$$\begin{array}{r} 45 \\ - 22 \\ \hline \end{array}$$


$$\begin{array}{r} 43 \\ - 31 \\ \hline \end{array}$$


$$\begin{array}{r} 67 \\ - 16 \\ \hline \end{array}$$



23

24

25

32

52



It is the second brightest planet after the moon. It is considered earth's sister because of its size, composition, and the age of its surface.