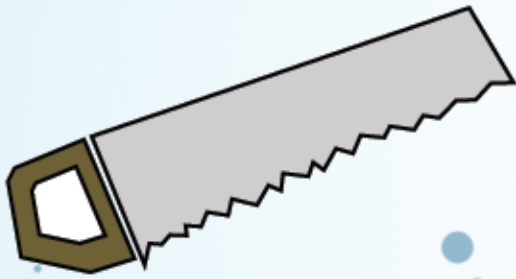

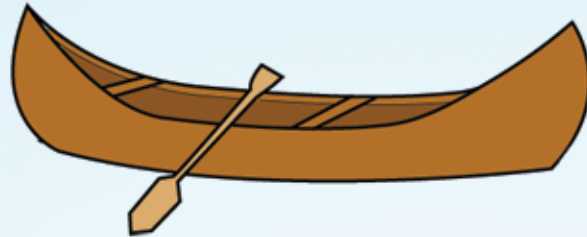


# SINK or FLOAT?

Circle the objects that would sink to the bottom of the ocean floor.



## ★ REMINDER! ★

An object will sink if it is more dense than the water it is in.