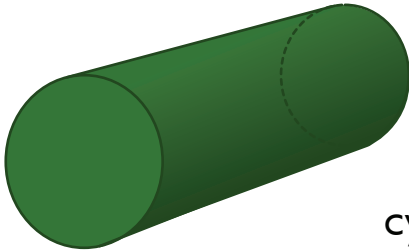
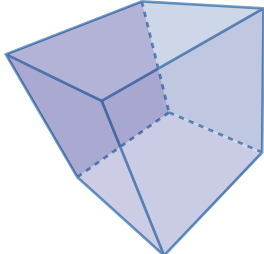
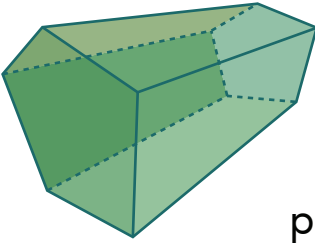
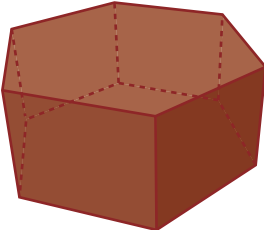



Did you know that many 3-D shapes are made of 2-D shapes? Look at the 3-D shapes below. Write which 2-D shapes, and how many, you can see!

3-D Shape	2-D Shapes
 <p data-bbox="724 805 869 858">cylinder</p>	
 <p data-bbox="778 1097 869 1150">cube</p>	
 <p data-bbox="547 1391 869 1444">pentagonal prism</p>	
 <p data-bbox="566 1678 869 1731">hexagonal prism</p>	
 <p data-bbox="778 1976 869 2029">cone</p>	