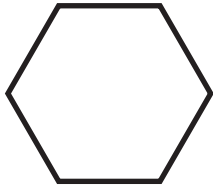
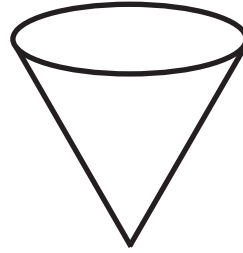


△ ○ □ **Name That Shape!** □ ○ △

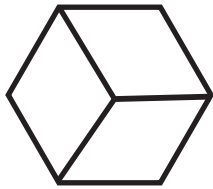
Circle the correct answer.



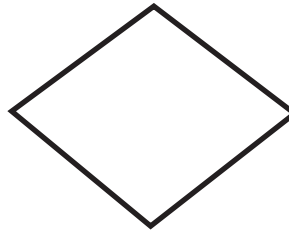
- a. pentagon
- b. hexagon
- c. octagon



- a. cone
- b. pyramid
- c. triangle




- a. rectangle
- b. square
- c. cube




- a. rectangle
- b. square
- c. diamond



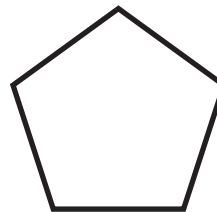
- a. diamond
- b. rhomboid
- c. rectangle




- a. circle
- b. oval
- c. sphere



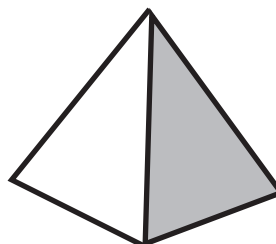
- a. cylinder
- b. prism
- c. oval



- a. octagon
- b. hexagon
- c. pentagon



- a. oval
- b. sphere
- c. circle



- a. prism
- b. pyramid
- c. cone