

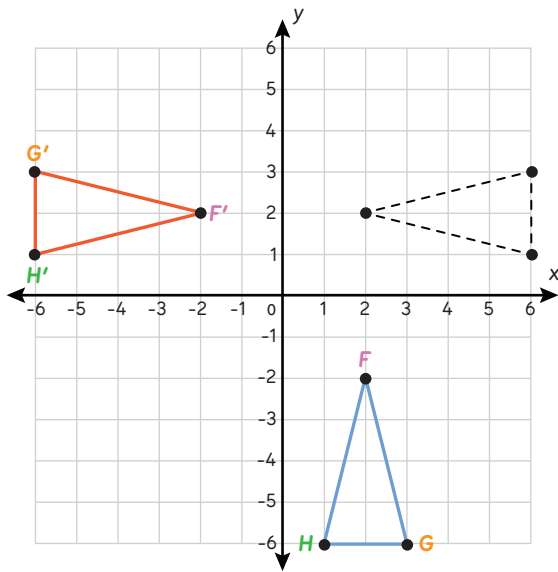
Sequences of Congruence Transformations



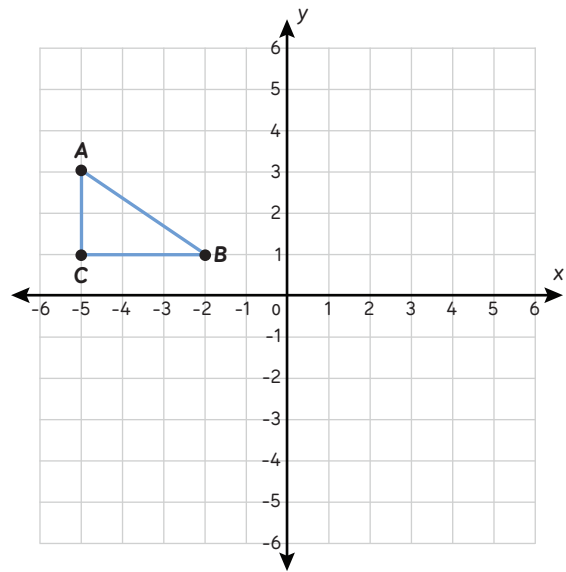
Translations, reflections, and rotations are **congruence transformations**. If a figure goes through a sequence of congruence transformations, the resulting figure and the original figure are congruent.

Try it! Graph each transformed figure and label its vertices. The first problem has been done for you.

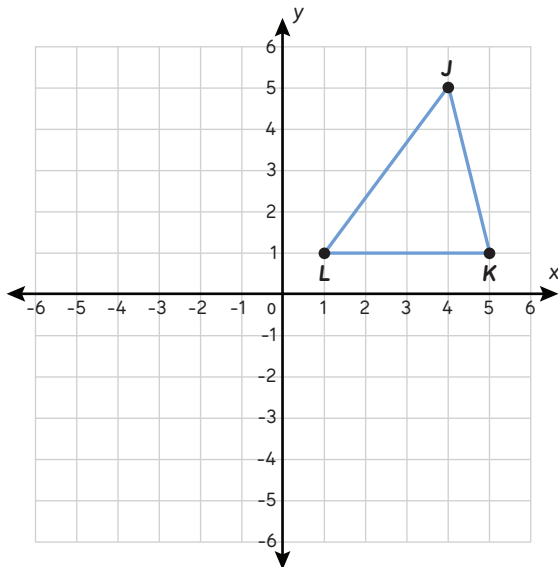
Graph the image of $\triangle FGH$ after a rotation 90° counterclockwise around the origin and a reflection over the y -axis.



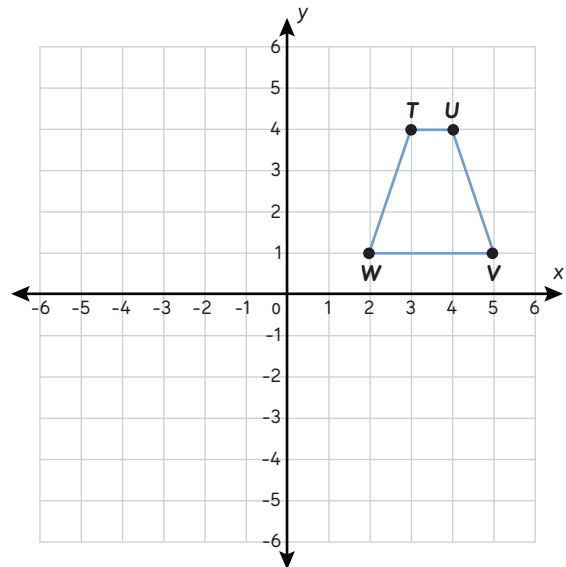
Graph the image of $\triangle ABC$ after a reflection over the x -axis and a translation 4 units right.



Graph the image of $\triangle JKL$ after a rotation 90° counterclockwise around the origin and a translation 5 units down.



Graph the image of trapezoid $TUVW$ after a translation 2 units left and a reflection over the y -axis.

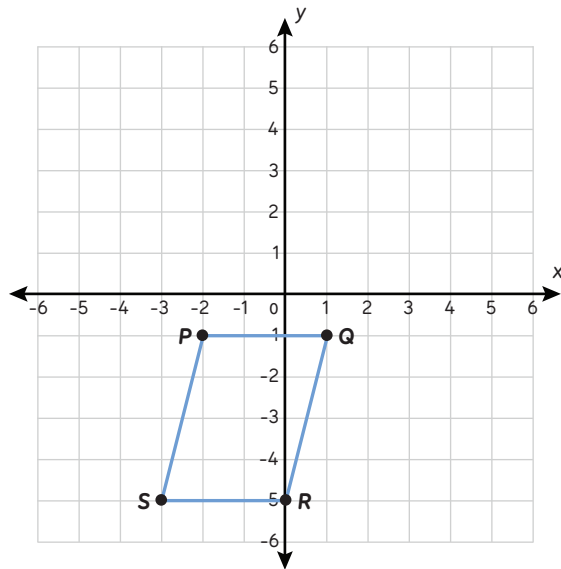


Sequences of Congruence Transformations

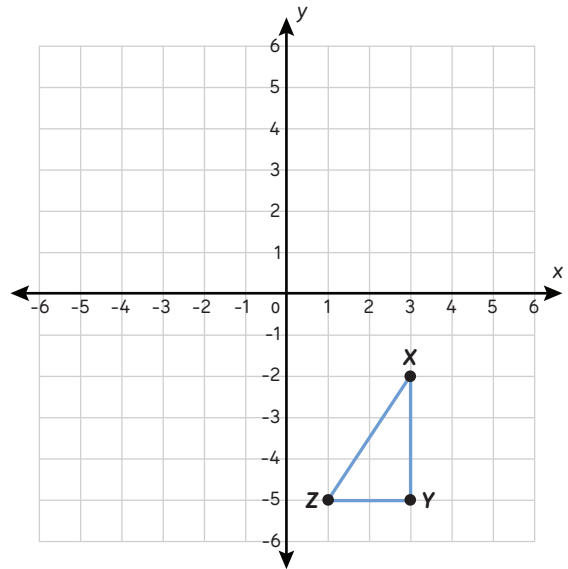


Keep going! Graph each transformed figure and label its vertices.

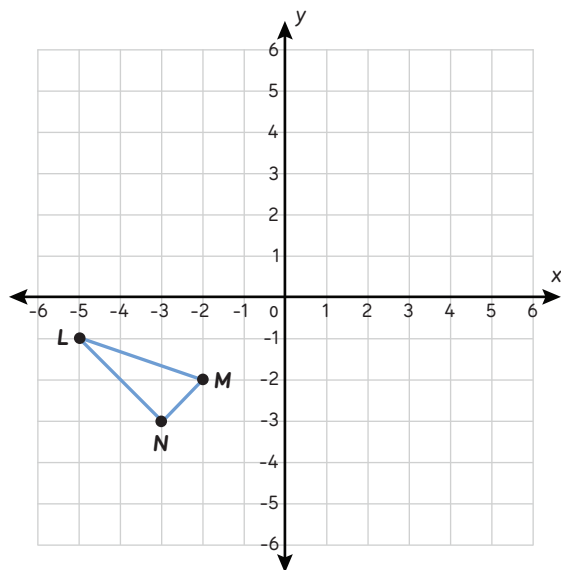
Graph the image of parallelogram $PQRS$ after a translation 3 units left and a rotation 180° counterclockwise around the origin.



Graph the image of $\triangle XYZ$ after a reflection over the line $x = -1$ and a rotation 90° counterclockwise around the origin.



Graph the image of $\triangle LMN$ after a translation 3 units up and 7 units right and a reflection over the line $y = -2$.



Graph the image of trapezoid $BCDE$ after a rotation 270° counterclockwise around the origin and a translation 2 units up and 4 units right.

