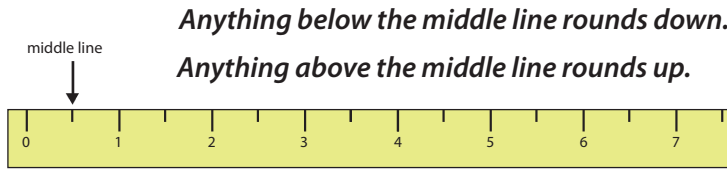
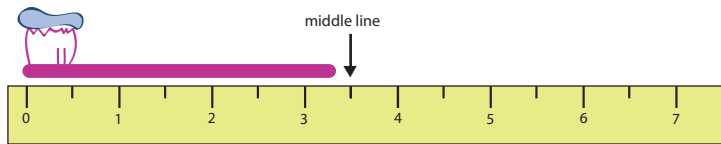


# Rounding in Inches


Cut out the ruler at the bottom of the page and use it to measure the pictures below. Write your answer in inches. Don't forget to round the number.



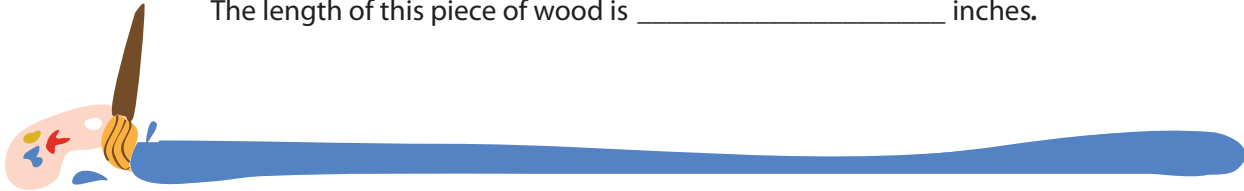
**Example:** The toothbrush is between 3 and 3 1/2 inches.



**Round down!** The toothbrush is about 3 inches long.



The length of this piece of wood is \_\_\_\_\_ inches.



The length of this painted line is \_\_\_\_\_ inches.



The length of the ant's walking route is \_\_\_\_\_ inches.

