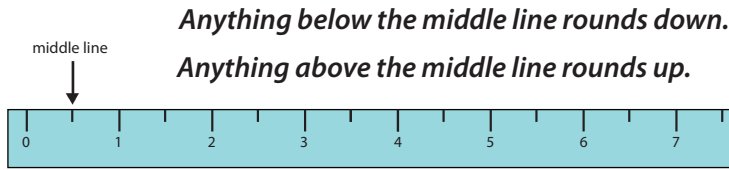
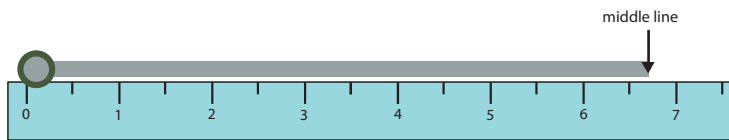


Rounding in Centimeters


Cut out the ruler at the bottom of the page and use it to measure the pictures below. Write your answers in centimeters. Don't forget to round the number.



Example: The wand is between 6 1/2 and 7 centimeters.



Round up! The length is 7 centimeters.



The length of this foot print is _____ centimeters.



The length of this box is _____ centimeters.



The length of the snail's traveling route is _____ centimeters.

