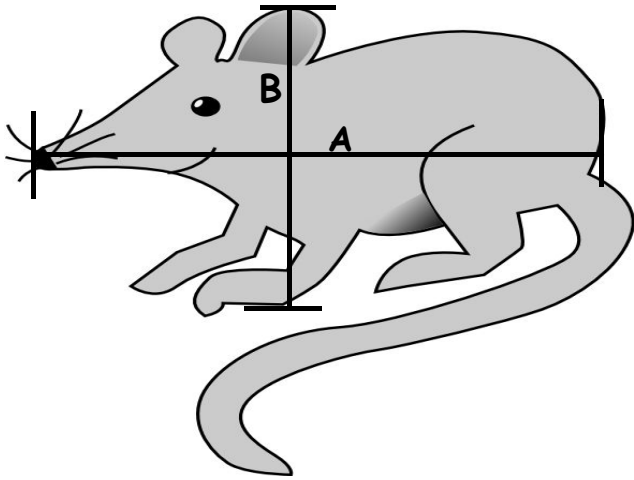


Measuring Animals

Use a ruler to answer the questions about each animal. Find the exact measurement and then round to the nearest whole number.



A. How long is the mouse?

Inches

Centimeters

Exact

Estimate

Exact

Estimate

B. How tall is the mouse?

Inches

Centimeters

Exact

Estimate

Exact

Estimate

A. How long is the cat?

Inches

Centimeters

Exact

Estimate

Exact

Estimate

B. How tall is the cat to its tail?

Inches

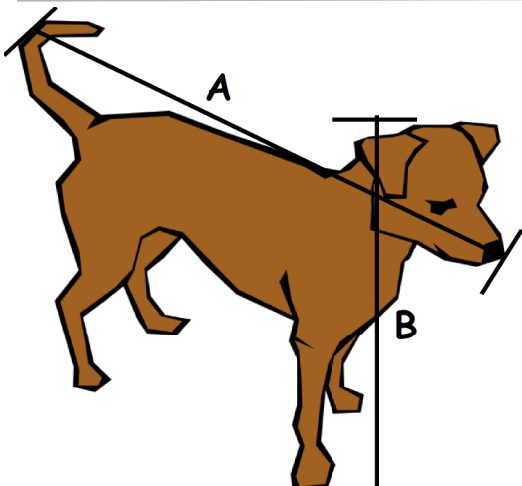
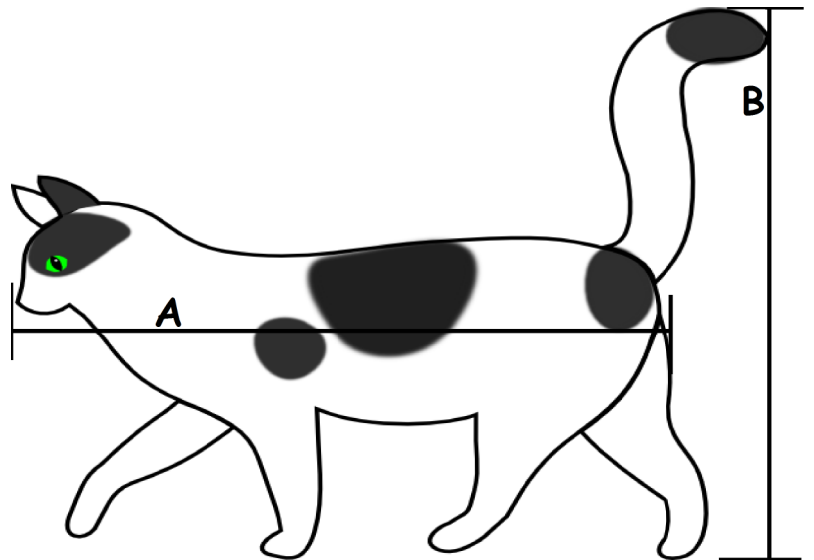
Centimeters

Exact

Estimate

Exact

Estimate



A. How long is the dog from nose to tail?

Inches

Centimeters

Exact

Estimate

Exact

Estimate

B. How tall is the dog from paw to head?

Inches

Centimeters

Exact

Estimate

Exact

Estimate