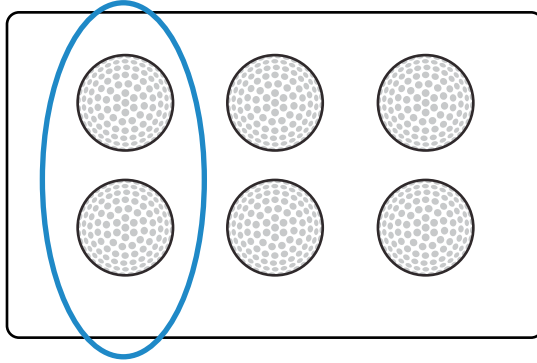


Hole in One - Repeated Addition

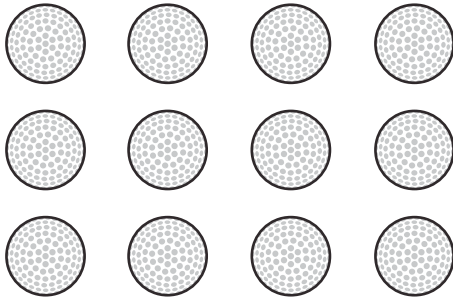
The Carlton Oaks Golf Course is getting ready for their big golf tournament. They want to make sure they have enough golf balls for the players. Use repeated addition to help them figure out how many golf balls they have.

Example:

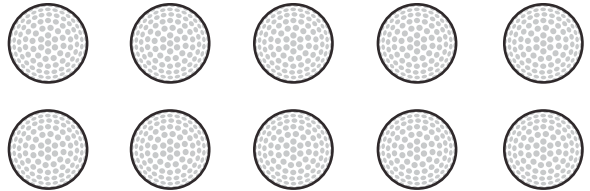


$$\underline{2 + 2 + 2 = 6}$$

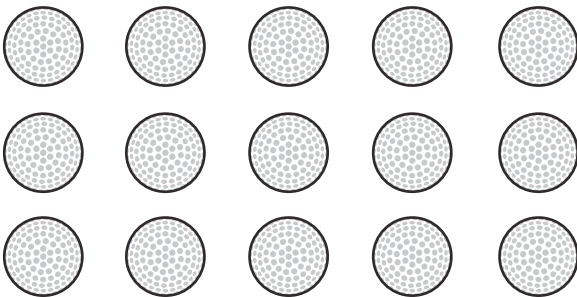
1.



2.



3.



4.

