

# Repeated Addition on the Farm

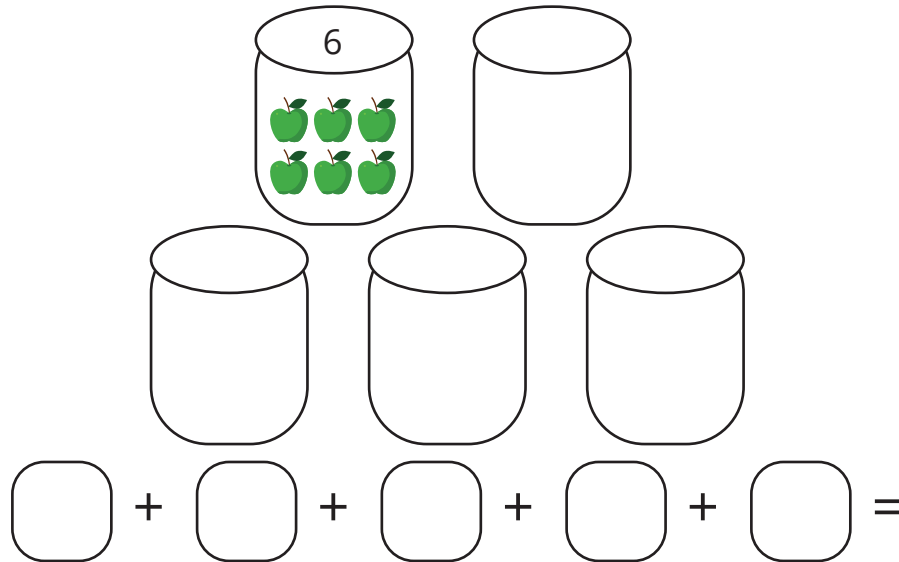
Name: \_\_\_\_\_

Date: \_\_\_\_\_

Complete the illustration for each exercise and answer the questions that follow.

1. Karly is helping with the harvest on her grandfather's farm. She has 5 apple barrels. If she puts 6 apples into each barrel, how many apples has she harvested altogether?

Finish the drawing below and use repeated addition to solve.

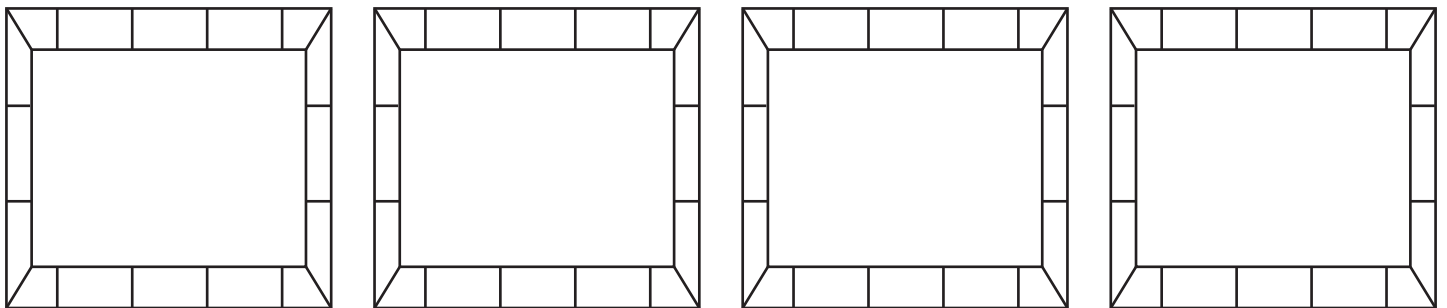


Write a multiplication problem to show how many apples Karly harvested.

---

---

2. Shep the sheepdog has herded the new baby lambs into their enclosures. There are 4 enclosures with 7 lambs in each. How many lambs are there altogether?



Use repeated addition to solve. \_\_\_\_\_

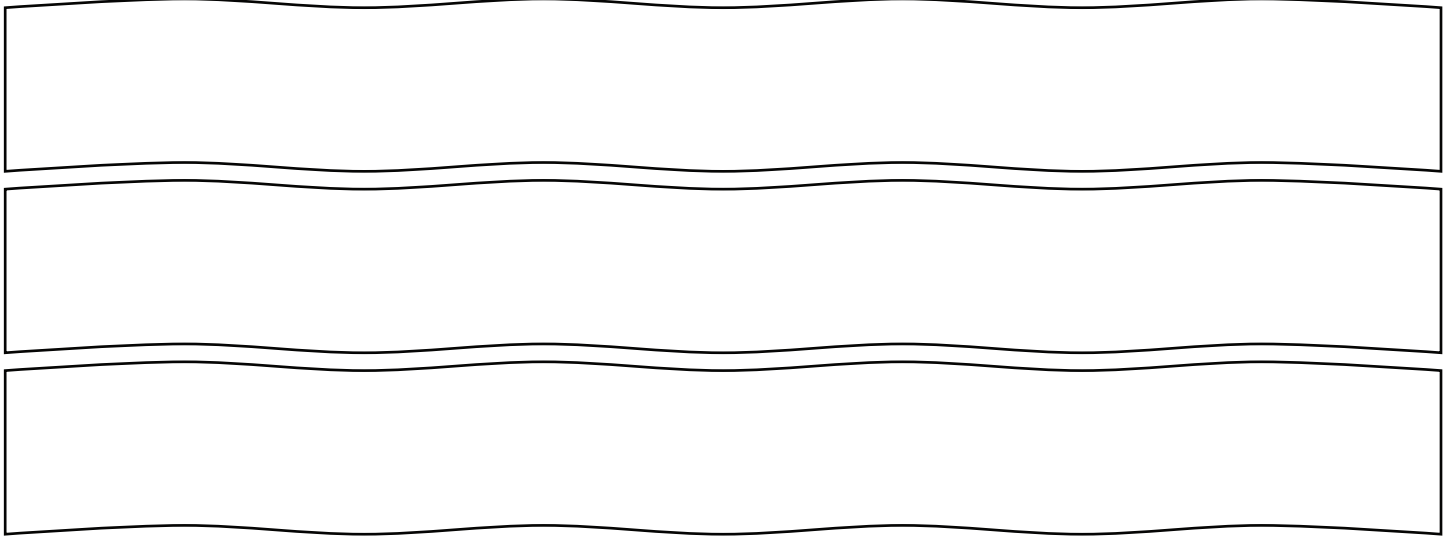
Write a multiplication problem to show how many lambs Shep herded. \_\_\_\_\_

# Repeated Addition on the Farm

Name: \_\_\_\_\_

Date: \_\_\_\_\_

3. Uncle Peter is sowing corn in the fields. There are 3 rows in the corn field and he is planting 8 seeds in each row. How many stalks of corn will Peter plant altogether?



Use repeated addition to solve. \_\_\_\_\_

Write a multiplication problem to show how many corn stalks Peter will plant.

---

4. Grandma Tilly is collecting eggs for breakfast. There are 6 hens in the henhouse. Each hen laid 4 eggs. How many eggs can Grandma collect?

Draw a picture.

Use repeated addition to solve. \_\_\_\_\_

Write a multiplication problem to show how many eggs Grandma can collect.

---