

# Addition Facts

Multiplication problems can also be expressed with addition. Write the addition facts that go with each multiplication sentence. The first one is done for you.

$$3 \times 7 = 3 + 3 + 3 + 3 + 3 + 3 + 3$$

---

$$5 \times 4 =$$

---

$$6 \times 2 =$$

---

$$10 \times 5 =$$

---

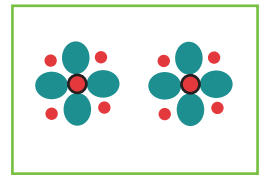
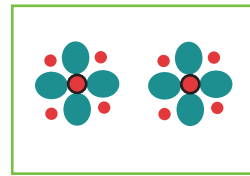
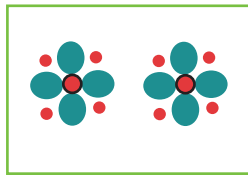
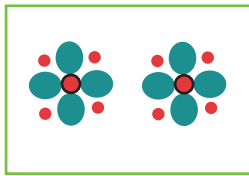
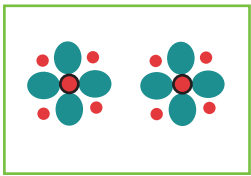
$$7 \times 7 =$$

---

$$9 \times 4 =$$

---

Look at the pictures below.



Write the addition fact:

---

Write the multiplication sentence:

---