







Name: _____

Date: _____

Record the Time

Directions: Record the time on the clocks below. Next, figure out how much time has elapsed, or gone by, from the start time to the end time.

<p>Start Time</p>  <p>_____</p> <p>_____</p>	<p>End Time</p>  <p>_____</p> <p>_____</p>	<p>Time passed</p> <p>_____ hour(s)</p> <p>_____ minutes(s)</p>
<p>Start Time</p>  <p>_____</p> <p>_____</p>	<p>End Time</p>  <p>_____</p> <p>_____</p>	<p>Time passed</p> <p>_____ hour(s)</p> <p>_____ minutes(s)</p>
<p>Start Time</p>  <p>_____</p> <p>_____</p>	<p>End Time</p>  <p>_____</p> <p>_____</p>	<p>Time passed</p> <p>_____ hour(s)</p> <p>_____ minutes(s)</p>