





RED LINE		RED LINE EXPRESS		SANTA CRUZ LINE		SACRAMENTO LINE	
San Jose	9:15	San Jose	9:30	San Jose	2:05	San Francisco	9:30
Palo Alto	9:45	Palo Alto	No Stop	Campbell	2:20	Oakland	9:50
San Francisco	10:15	San Francisco	10:00	Los Gatos	2:20	Berkeley	10:05
San Rafael	10:30	San Rafael	10:10	Scotts Valley	3:00	Vallejo	10:30
Novato	10:50	Novato	No Stop	Santa Cruz	3:05	Fairfield	10:55
Petaluma	11:05	Petaluma	No Stop	Monterey	3:55	Vacaville	11:10
Santa Rosa	11:15	Santa Rosa	11:00			Davis	11:35
Napa	12:10	Napa	No Stop			Sacramento	11:55
Vallejo	12:30	Vallejo	No Stop				
Oakland	12:55	Oakland	11:30				
Hayward	1:15	Hayward	No Stop				
San Jose	1:55	San Jose	12:00				




Look at the schedule for the San Francisco Bay Subway and answer the questions on the next page.




1. A round trip on the Red Line takes 4 hours and 40 minutes. How much less time does the trip on the Red Line Express take?

2. Sam is waiting at San Jose. He is going to San Francisco and wants to spend the least amount of time possible on the train. Should he take the express train or the regular train?



3. Marty lives in San Rafael and wants to visit his friend in Vallejo this weekend. He wants to take the shortest train ride possible. Would taking the express train help make his trip to Vallejo shorter?

4. Hayden lives in Berkeley and is going to stay with his aunt and uncle in Davis for the weekend. They're picking him up from the train station at 11:45 and not a minute later! If he takes the Sacramento line, will he make it to Davis in time?



5. Leticia and her friends live in San Francisco and want to go surfing in Santa Cruz this weekend. What trains do they need to take to get there?

