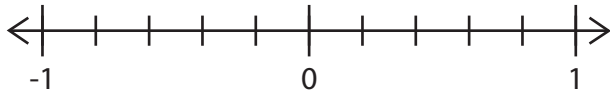


Rational Numbers on Number Lines

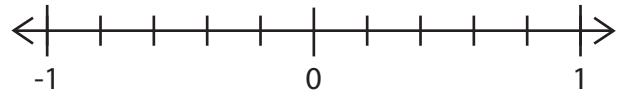


Plot each number on the number line.

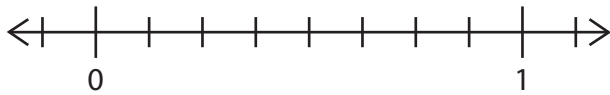
$$\frac{3}{5}$$



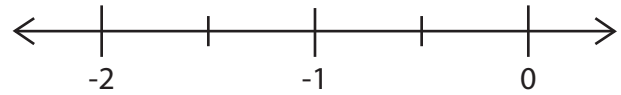
$$0.8$$



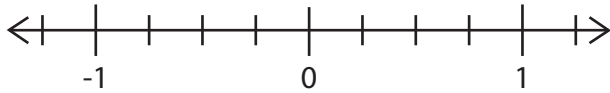
$$\frac{7}{8}$$



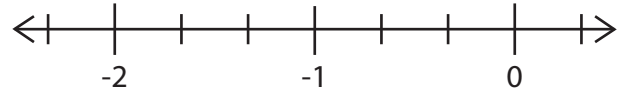
$$-0.5$$



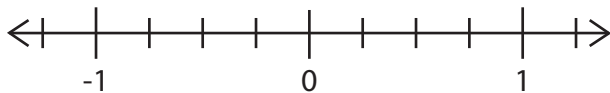
$$-\frac{1}{4}$$



$$-\frac{2}{3}$$



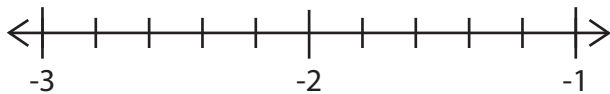
$$-0.75$$



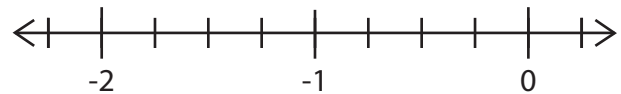
$$2\frac{1}{3}$$



$$-1.4$$



$$-1\frac{3}{4}$$



Plot all of the numbers on the number line below.

A. -0.2

B. $-1\frac{1}{10}$

C. $-\frac{1}{2}$

D. -0.9

E. -1.6

F. $-\frac{2}{5}$

