

Name _____

Date _____

Which Is Heavier?

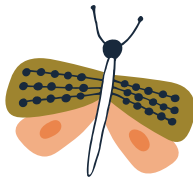
Order each item by writing a number in each of the the blank spaces.
Write **1** next to the lightest item in each row. Write **3** next to the heaviest item.

Example:



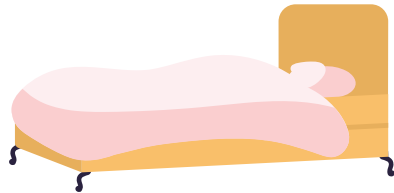

3



1



2



Challenge! Draw an object that you think is heavier than the one shown.

