

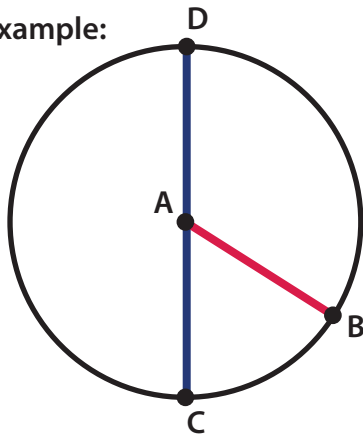
# Circle: Practice Naming The Circle's Components

Draw lines to complete the circle using the labels to the right. Use red for radius and blue for the diameter.

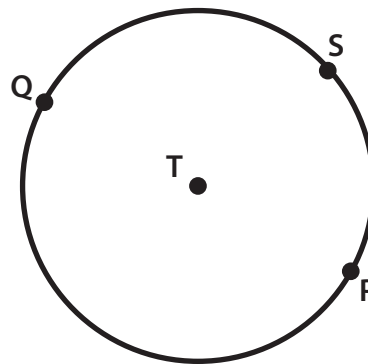
Review:

- The name of the point in the center of the circle is also the name of that circle.
- A line from the point in the center of the circle to the point on the edge of the circle is called the radius.
- A line from the point on the edge of the circle through the point in the center of the circle to another point on the edge of the circle is called the diameter.

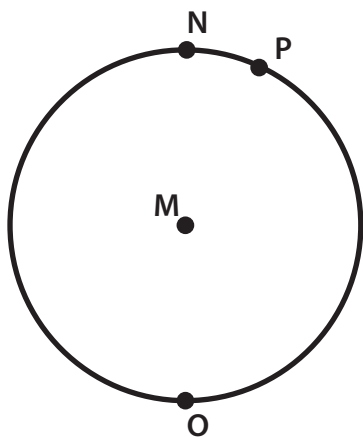
Example:



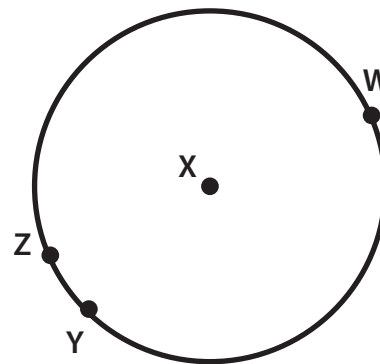
Circle A  
Radius AB  
Diameter CD



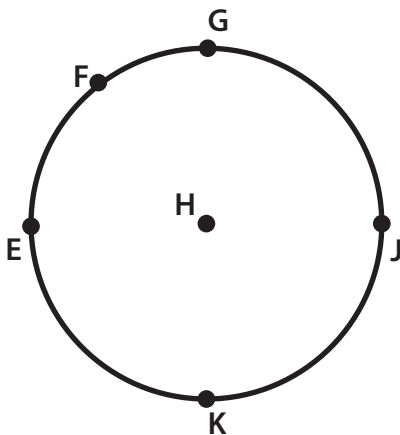
Circle T  
Radius TS  
Diameter PQ



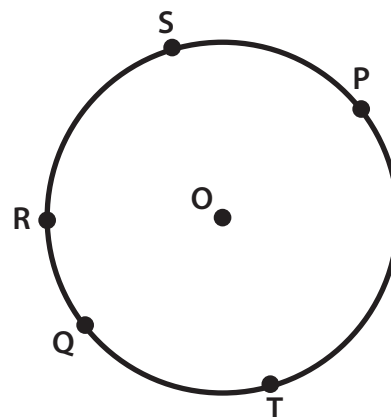
Circle M  
Radius MP  
Diameter NO



Circle X  
Radius XY  
Diameter WZ



Circle H  
Radius HF  
Diameter KG  
Diameter EJ



Circle O  
Radius R  
Diameter QP  
Diameter ST