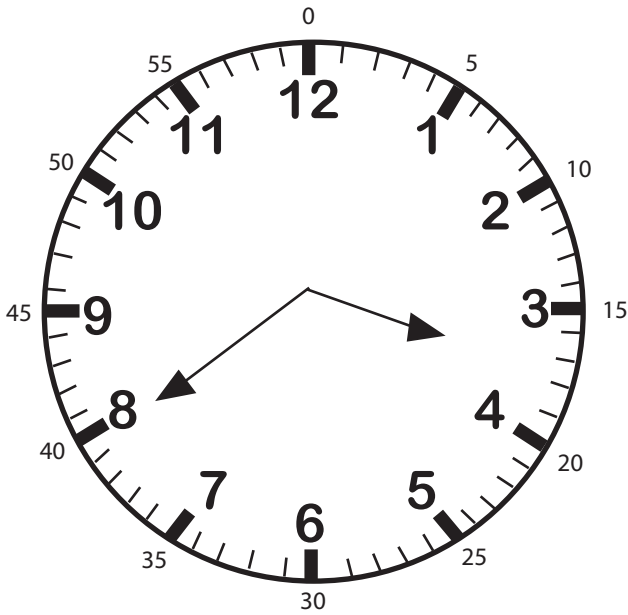



# How To Tell Time

There are 60 minutes in 1 hour.


1. First look at where the short hand is. It is between the 3 and 4. So it is sometime during 3 o'clock.
2. What number, between 1-59 is the long hand pointing to? It is pointing to the 8 which is 40 minutes.
3. The time is 3:40




Practice reading time by writing down the correct time for each clock below.




:  
\_\_\_\_\_




:  
\_\_\_\_\_




:  
\_\_\_\_\_



:  
\_\_\_\_\_



:  
\_\_\_\_\_



:  
\_\_\_\_\_