

Shapes & Fractions

Circle the correct answer.





- a. hexagon
- b. heptagon
- c. octagon






What is the perimeter?

- a. 22 in.
- b. 17 in.
- c. 18 in.

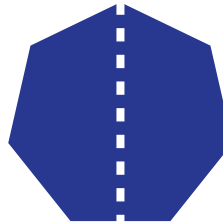


Which one is next?


- a. 
- b. 
- c. 



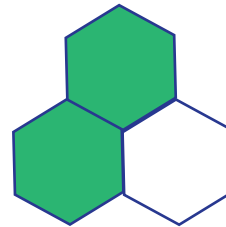
- a. congruent
- b. not congruent
- c. symmetrical




- a. congruent
- b. not congruent
- c. symmetrical




- a. $\frac{1}{5}$
- b. $\frac{2}{3}$
- c. $\frac{4}{7}$




- a. $\frac{1}{3}$
- b. $\frac{2}{3}$
- c. $\frac{3}{3}$



- a. $\frac{3}{8}$
- b. $\frac{4}{6}$
- c. $\frac{2}{9}$



- a. $\frac{3}{16}$
- b. $\frac{1}{4}$
- c. $\frac{7}{9}$



- a. $\frac{5}{12}$
- b. $\frac{3}{9}$
- c. $\frac{9}{12}$



- a. $\frac{3}{9}$
- b. $\frac{3}{6}$
- c. $\frac{2}{6}$