

# Shape Math

Count and Compute


example



$\square$  3

$\square$  2

$\square\square$  5

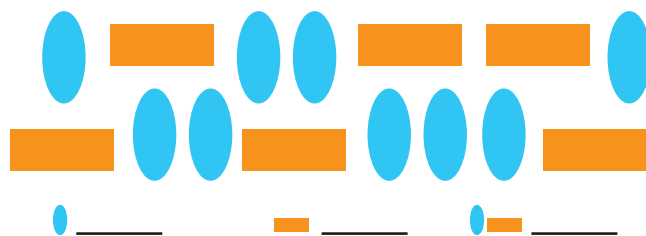


$15 - 9 = \underline{\quad}$      $15 + 6 = \underline{\quad}$

$9 + 6 = \underline{\quad}$      $9 - 6 = \underline{\quad}$

$7 - 5 = \underline{\quad}$      $12 - 5 = \underline{\quad}$

$5 + 5 = \underline{\quad}$      $12 + 7 = \underline{\quad}$



$9 + 8 = \underline{\quad}$      $17 - 8 = \underline{\quad}$

$9 - 8 = \underline{\quad}$      $17 + 9 = \underline{\quad}$




$7 + 11 = \underline{\quad}$      $11 - 7 = \underline{\quad}$

$7 - 4 = \underline{\quad}$      $11 + 7 = \underline{\quad}$



$7 + 6 = \underline{\quad}$      $13 - 6 = \underline{\quad}$

$7 - 6 = \underline{\quad}$      $13 + 7 = \underline{\quad}$



$8 + 6 = \underline{\quad}$      $14 - 6 = \underline{\quad}$

$14 - 8 = \underline{\quad}$      $6 + 14 = \underline{\quad}$

