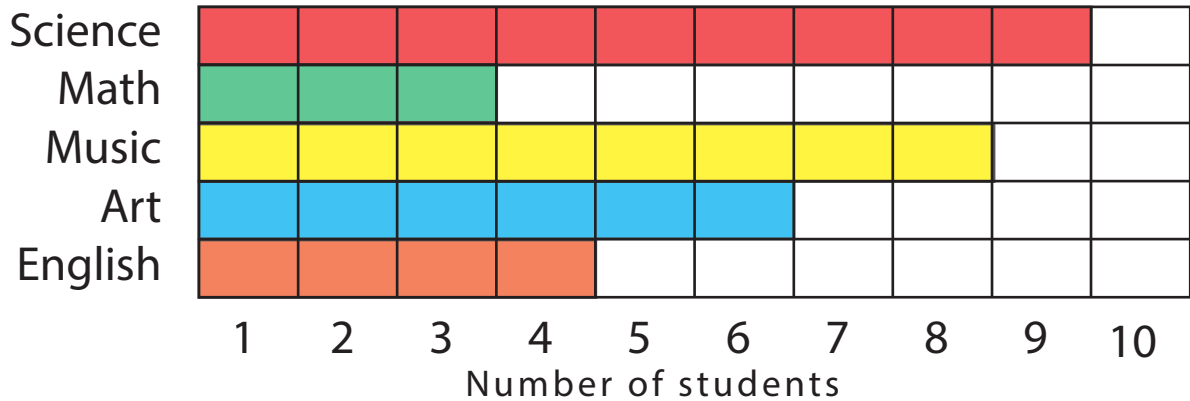



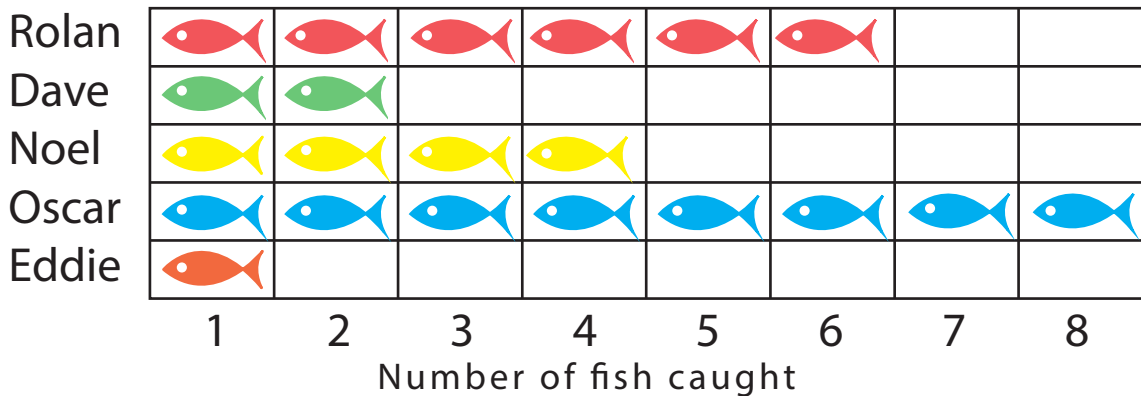
Graph Practice

Favorite subject



1. What subject do the students like the most? _____
2. What subject do the students like the least? _____
3. What subject is the students' second choice? _____
4. How many students like art? _____
5. How many students like English? _____

Fishing trip



1. Who caught the most fish? _____
2. Who caught the least fish? _____
3. What is the highest number of fish caught? _____
4. How many fish did Eddie catch? _____
5. What is the total number of fish caught? _____