
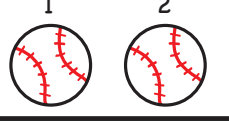



Let's Practice Subtraction!

Count the pictures and subtract.

Example:

1 2 3 4 $4 - 2 = 2$ 1 2
 $4 - 2 = 2$ 
4 take away 2 equals 2


1 2 3 4 5 6 7 8 9 10



$3 - 2 = \underline{\quad}$



$5 - 1 = \underline{\quad}$



$4 - 3 = \underline{\quad}$



$3 - 3 = \underline{\quad}$



$5 - 3 = \underline{\quad}$



$4 - 1 = \underline{\quad}$