

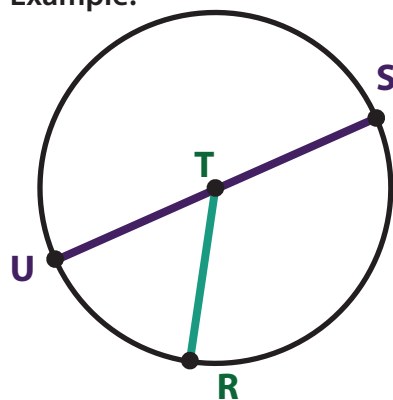
Circle: Practice Naming The Circle's Components 3

Label the circle, radius, and diameter and draw a line on each circle using the clues to the right.

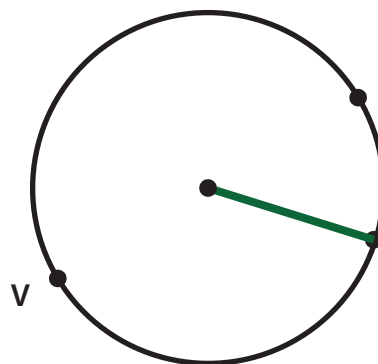
Review:

- The name of the point in the center of the circle is also the name of that circle.
- A line from the point in the center of the circle to the point on the edge of the circle is called the radius.
- A line from the point on the edge of the circle through the point in the center of the circle to another point on the edge of the circle is called the diameter.

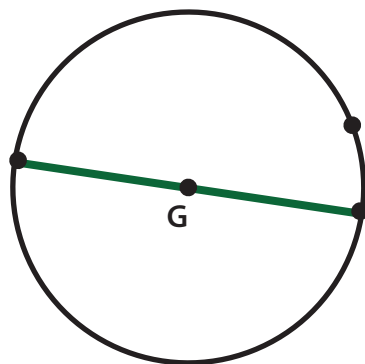
Example:



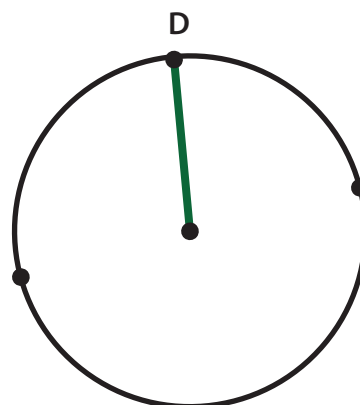
Circle T
Radius TR
Diameter SU



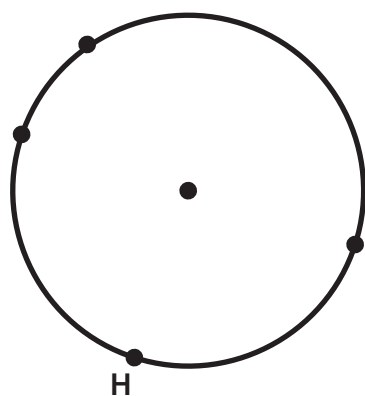
Circle X
Radius XW
Diameter UV



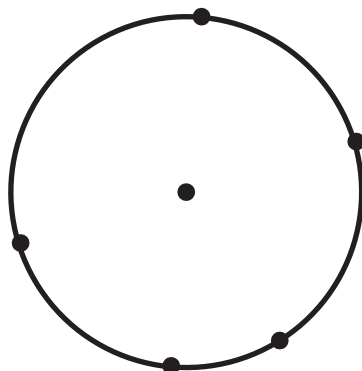
Circle G
Radius GH
Diameter IJ



Circle A
Radius AD
Diameter BC



Circle E
Radius EF
Radius EH
Diameter IJ



Circle C
Radius CD
Diameter EH
Diameter FG