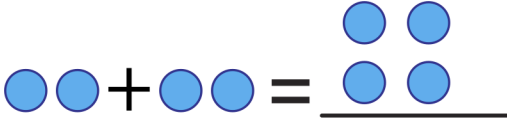


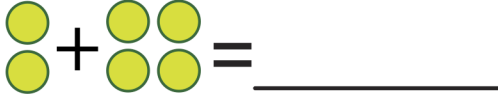

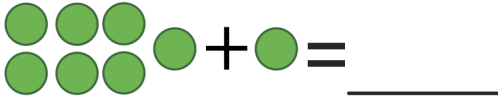




Practice Your Addition, 1 to 10 - Grid #1

★ Add the two numbers together for each problem. Write your answer in the blank space. Then add up the shapes and draw the answer. See Example 1.

Example 1. $2 + 2 = \underline{4}$ 	2. $4 + 2 = \underline{\quad}$ 
3. $1 + 4 = \underline{\quad}$ 	4. $2 + 4 = \underline{\quad}$ 
5. $4 + 3 = \underline{\quad}$ 	6. $7 + 1 = \underline{\quad}$ 
7. $6 + 3 = \underline{\quad}$ 	8. $6 + 2 = \underline{\quad}$ 

★ Now make up some more addition problems with your own shapes. Don't forget to color them in!