




Postal Addition

Read each problem. Write out the number equation and add to find the solution.



Isabel bought 5  .
Peter bought 3  .

How many  are there in all?

$$\text{-----} + \text{-----} = \text{-----}$$

Amy received 8  .
Tiffany has 3  .

How many  are there all together?

$$\text{-----} + \text{-----} = \text{-----}$$

Sammy has 8  to send.
Jenny brought 2  to the mailbox.

How many  's do they have in all?

$$\text{-----} + \text{-----} = \text{-----}$$

Jason bought 4  to send .
Suzy has 6  that she needs to write.

How many  do they have in all?

$$\text{-----} + \text{-----} = \text{-----}$$