

PLANE and SOLID SHAPES

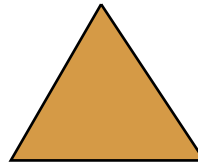


Label the plane shapes:

rectangle

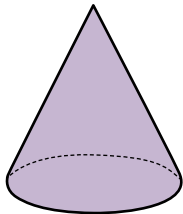
triangle

circle


square



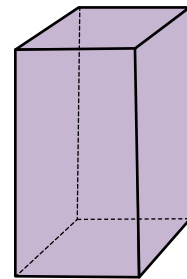
Find the plane shapes in each solid figures:



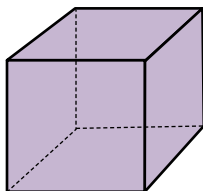
CONE



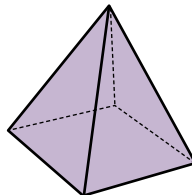
CYLINDER



RECTANGULAR PRISM



CUBE



PYRAMID