


Shopping Math: Furniture


Help Jenny decide what furniture to buy. Look at the prices in each category and circle the cheaper ones.

Lamps

o \$68



o \$86

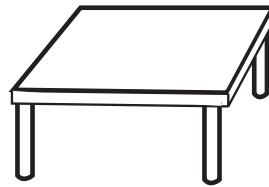


Tables

o \$142




o \$124

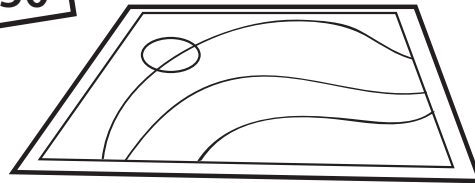


Rugs

o \$105



o \$150



Chairs

o \$136

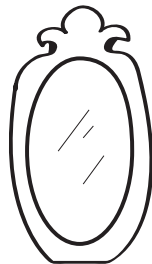


o \$163




Mirrors

o \$76



o \$67



Challenge!

Jenny only has \$230 to spend on furniture. Color in the items she can buy.