





PIRATE NUMBER SENSE

PIRATE PETEY'S treasure map has a few holes in it. Help him find the treasure by filling in the missing numbers along his path.

455 456 _____ 459



461



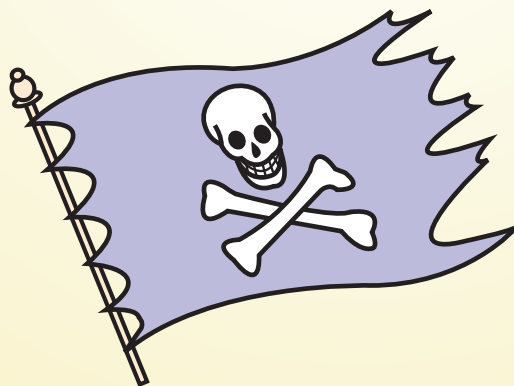
465 464 _____

_____ 469 _____ 467

471



474



_____ 477 478 _____ 480

