

# At School

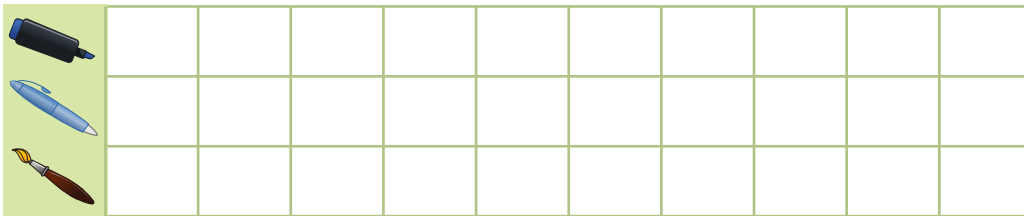
Read each problem. Use the picture graph to help you answer the questions.

Ben has 3 pencils, 5 crayons and 1 eraser. How many does he have in all?



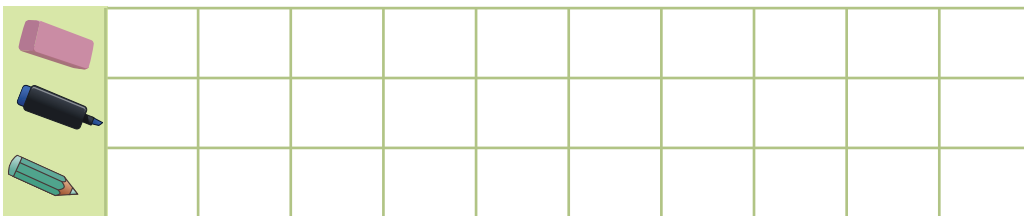
\_\_\_\_\_ supplies

Jenny has 2 markers, 3 pens and 6 paint brushes. How many does she have in all?



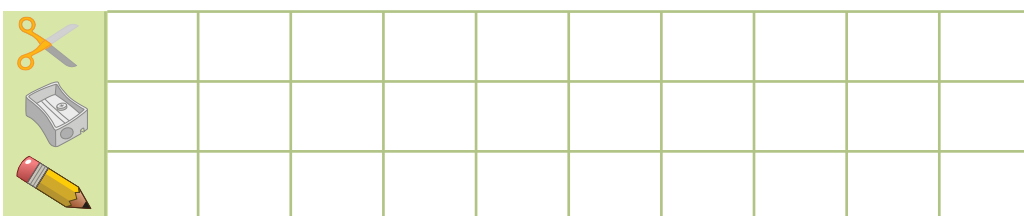
\_\_\_\_\_ supplies

Robbie has 3 erasers, 4 markers and 5 colored pencils. How many does he have in all?



\_\_\_\_\_ supplies

Tina has 4 scissors, 5 sharpeners and 3 pencils. How many does she have in all?



\_\_\_\_\_ supplies