






Mr. Postman

Mr. Postman recorded the number of letters he delivered this week.
Read the pictograph and answer the questions below.
Note: each symbol in the pictograph stands for 1.5 letters.



Day	Number of letters delivered
Monday	
Tuesday	
Wednesday	
Thursday	
Friday	

Questions:



1. How many letters did Mr. Postman deliver on Tuesday?

2. On what day did Mr. Postman deliver the fewest letters, and how many?

3. On what days did Mr. Postman deliver the same number of letters, and how many?

4. If Mr. Postman delivered 6 letters, how would you draw the symbols?