







Gift Wrapping



These two pictographs compare how many boxes Minnie wrapped during the holidays this year and last year. Read the pictographs and answer the questions below.

Note: each  in the pictograph stands for 3 of boxes.

Date (last year)	No. of Boxes
12/22	
12/23	
12/24	

Date (this year)	No. of Boxes
12/22	
12/23	
12/24	

 = 4

Questions:

1. What does this symbol represent? 

2. On what date last year did Minnie wrap the fewest boxes?

3. This year, on what date did Minnie wrap the most boxes?

4. Draw symbols to represent 6 boxes in the space on the right.