


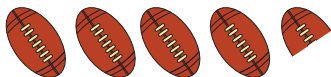


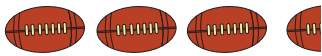





Sport Fans! Reading a Pictograph

These two pictographs are comparing numbers of balls kicked and thrown on the field. Look at the information and answer the questions below.


Note: each  in the pictograph stands for 600 of them and each  in the pictograph stands for 800 of them.

Match	Number of Balls Kicked
Match A	
Match B	
Match C	
Match D	


Match	Number of Balls Thrown
Match A	
Match B	
Match C	
Match D	

 = 600  = 800

Questions:

1. What do you think this symbol  represents?

Answer: _____

2. What do you think this symbol  represents?

Answer: _____

3. What match had the same amount of balls kicked and thrown?

Answer: _____

4. In total did more balls get kicked or thrown in all the matches?

Answer: _____

5. Write in order the matches which have the most to the least balls kicked and thrown.

Answer: _____