




Carrots for Bunnies Reading a Pictograph

Your friends feed carrots to their pet bunnies. Find out how many carrots they gave to their pets and answer the questions below. Note: each carrot in the pictograph stands for 2 carrots fed.

Owner	Number of Carrots
Tony's	
Sammy's	
Lily's	

 = 2 carrots

Questions:

1. How many carrots did Tony feed his bunny?

Answer: _____

2. How many carrots did Sammy feed her bunny?

Answer: _____

3. Who fed the most carrots?

Answer: _____

4. Who fed 12 carrots?

Answer: _____

5. Who fed more carrots, Tony or Lily?

Answer: _____