






# At the Pet Store

Solve each problem by using the store to fill in the equations.



Esra bought 1 penguin and 1 hamster. How much did he spend?

$$\text{-----} + \text{-----} = \text{-----}$$

Amelia has 15¢. She bought 1 cat and 1 toucan. How much does she have left?

$$\text{-----} + \text{-----} = \text{-----} \text{ and } 15 - \text{-----} = \text{-----}$$

Janet bought 3 bunnies. How much did she spend?

$$\text{-----} + \text{-----} + \text{-----} = \text{-----}$$

Brian has 20¢. He bought 1 bird and 1 penguin. How much does he have left?

$$\text{-----} + \text{-----} = \text{-----} \text{ and } 20 - \text{-----} = \text{-----}$$

Laura bought 4 hamsters. How much did she spend?

$$\text{-----} + \text{-----} + \text{-----} + \text{-----} = \text{-----}$$