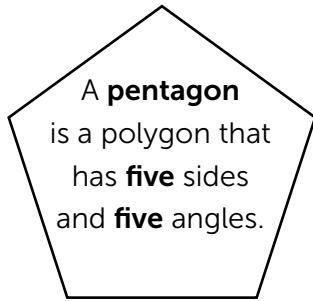
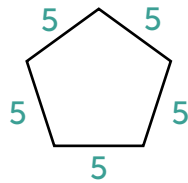


# Pentagon Perimeters



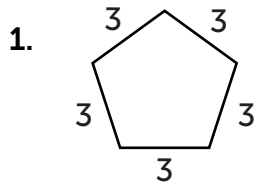
To find the **perimeter** of a pentagon, add up the lengths of each side.



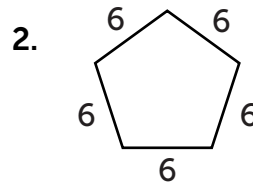
$$5 + 5 + 5 + 5 + 5 = \mathbf{25 \text{ units}}$$



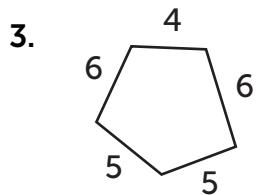
**Directions:** Find the perimeter of the pentagons.



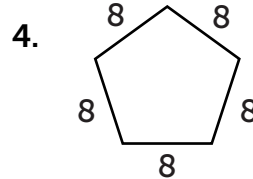
Perimeter: \_\_\_\_\_ units



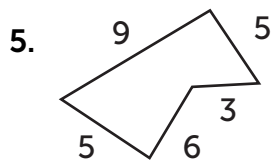
Perimeter: \_\_\_\_\_ units



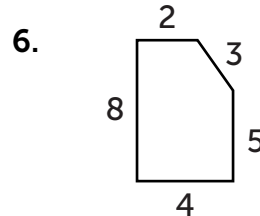
Perimeter: \_\_\_\_\_ units



Perimeter: \_\_\_\_\_ units



Perimeter: \_\_\_\_\_ units



Perimeter: \_\_\_\_\_ units