


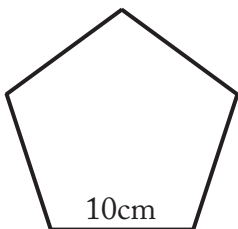
Pentagon Perimeter Practice

Directions: Find the perimeter of each pentagon.

Remember $P=5a$ where a = side.

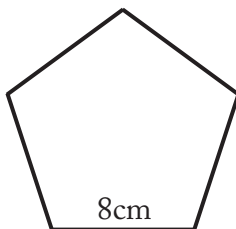


1.



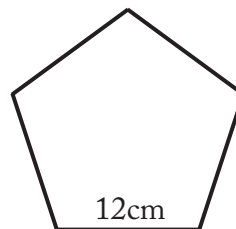
P= _____

2.



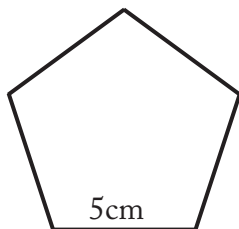
P= _____

3.



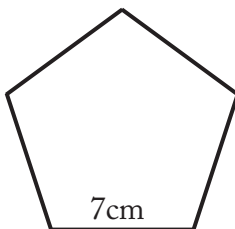
P= _____

4.



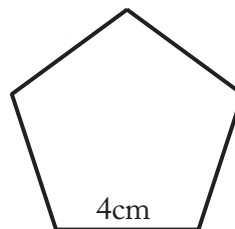
P= _____

5.



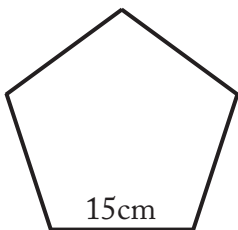
P= _____

6.



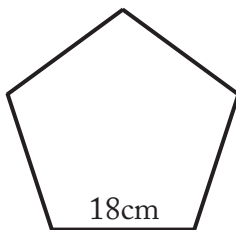
P= _____

7.



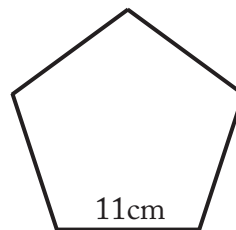
P= _____

8.



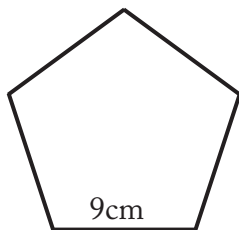
P= _____

9.



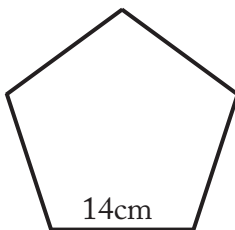
P= _____

10.



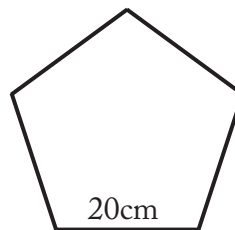
P= _____

11.



P= _____

12.



P= _____