


# Penny Piggies

The piggy banks are very full! How many coins did each of them eat?  
How much money does each have?


How many coins? \_\_\_\_\_

How much money? \_\_\_\_\_




How many coins? \_\_\_\_\_

How much money? \_\_\_\_\_



How many coins? \_\_\_\_\_

How much money? \_\_\_\_\_



How many coins? \_\_\_\_\_

How much money? \_\_\_\_\_

