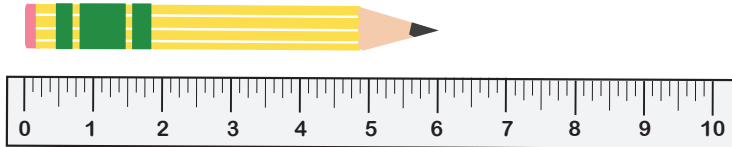


Pencil Problems


Pencils come in all shapes and sizes! Let's figure out which ones are the longest.

A. Pencil A is 6 inches long. Pencil B is 2 inches long. How much longer is Pencil A than Pencil B?

Pencil A

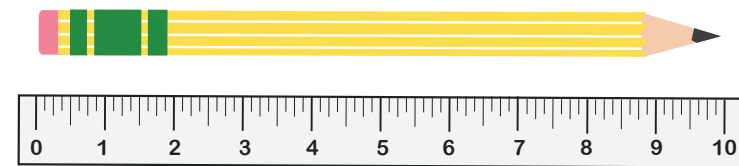


Pencil B

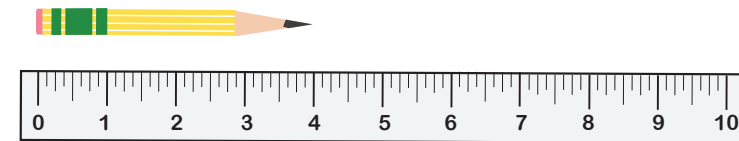


B. Pencil C is 10 inches long. Pencil D is 4 inches long. How much longer is Pencil C than Pencil D?

Pencil C

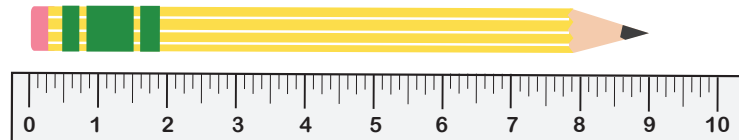


Pencil D



C. Pencil E is 9 inches long. Pencil F is 7 inches long. How much longer is Pencil E than Pencil F?

Pencil E



Pencil F

