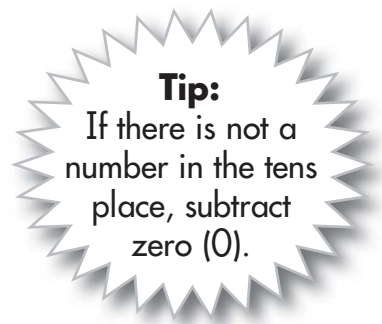





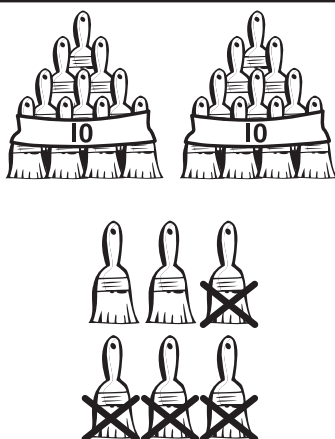
First, subtract the numbers in the ones column. Then, subtract the numbers in the tens column. Write how many are left.




tens	ones
3	5
-	3
3	2



tens	ones
2	6
-	4



tens	ones
4	8
-	2



$$\begin{array}{r} 87 \\ - 6 \\ \hline \end{array}$$

$$\begin{array}{r} 54 \\ - 1 \\ \hline \end{array}$$

$$\begin{array}{r} 63 \\ - 3 \\ \hline \end{array}$$

$$\begin{array}{r} 99 \\ - 4 \\ \hline \end{array}$$

$$\begin{array}{r} 75 \\ - 2 \\ \hline \end{array}$$

$$\begin{array}{r} 49 \\ - 7 \\ \hline \end{array}$$

$$\begin{array}{r} 68 \\ - 4 \\ \hline \end{array}$$

$$\begin{array}{r} 96 \\ - 2 \\ \hline \end{array}$$

$$\begin{array}{r} 36 \\ - 5 \\ \hline \end{array}$$

$$\begin{array}{r} 55 \\ - 3 \\ \hline \end{array}$$