



Far Out Subtraction!


Count how many outer space objects are in each box, then subtract the darker ones. Write your answer in the box on the right.




$$\begin{array}{r} 6 \\ - 4 \\ \hline \end{array}$$



$$\begin{array}{r} 3 \\ - 2 \\ \hline \end{array}$$



$$\begin{array}{r} 6 \\ - 2 \\ \hline \end{array}$$



$$\begin{array}{r} 4 \\ - 3 \\ \hline \end{array}$$