

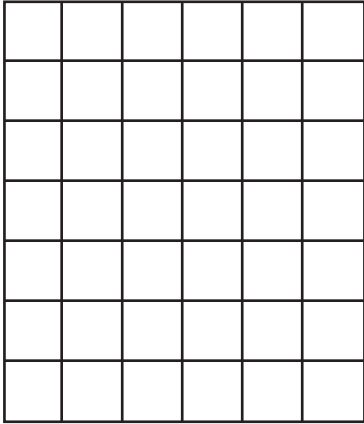
Name: _____

Date: _____

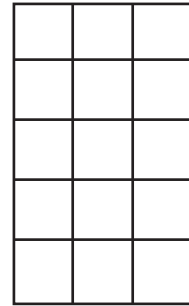
One-Digit Multiplication with Area Models

Directions: Use the area models to complete the following multiplication equations.

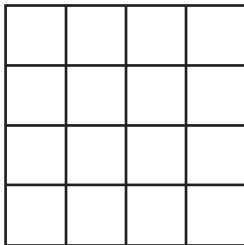
1. $\underline{\quad} \times \underline{\quad} = 42$




2. $\underline{\quad} \times \underline{\quad} = 15$



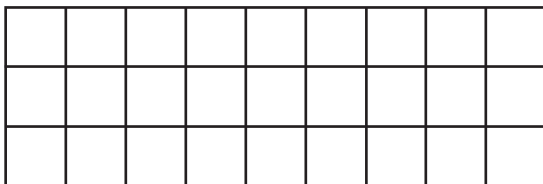
3. $\underline{\quad} \times \underline{\quad} = 16$



4. $\underline{\quad} \times \underline{\quad} = 30$



5. $\underline{\quad} \times \underline{\quad} = 27$



6. $\underline{\quad} \times \underline{\quad} = 32$

