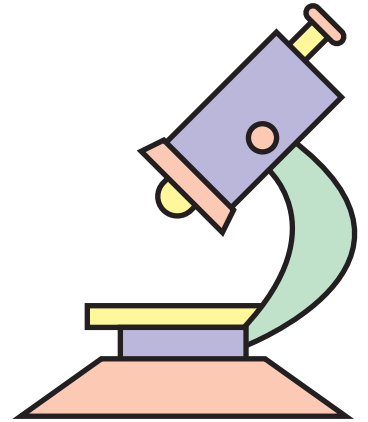
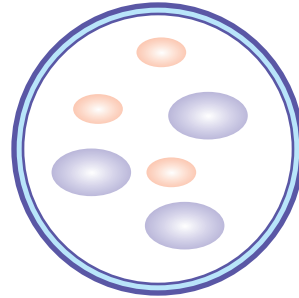
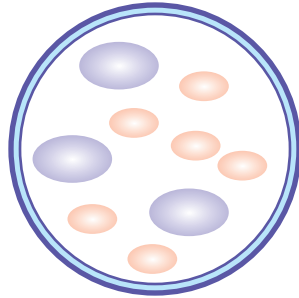
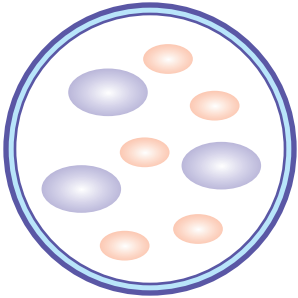
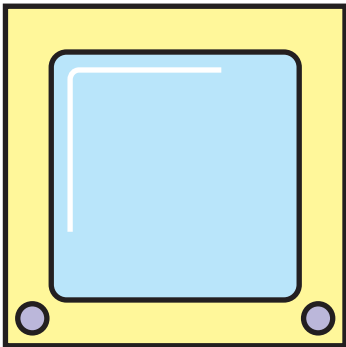


# Math Lab: Odds & Evens #3

Circle the slide below that shows an ODD number of cells.



Write ODD or EVEN beneath each number below.



**55**

**38**

**92**

\_\_\_\_\_

\_\_\_\_\_

\_\_\_\_\_

Color the odd numbered formulas RED and the even numbered formulas BLUE.

