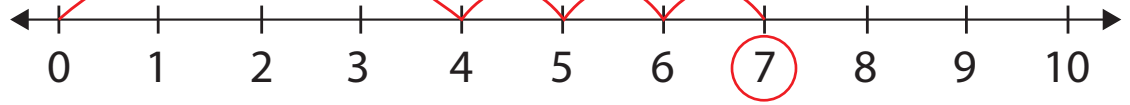


# NUMBER LINE ADDITION 2

Solve the following problems using the number line. Show each problem on the number line, then write the answer. The first one is done for you.

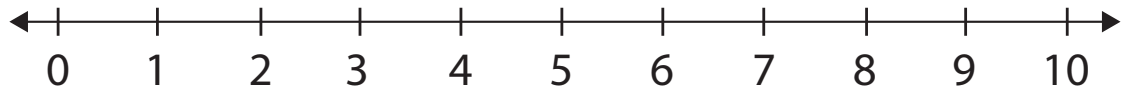


$4 + 3 = 7$

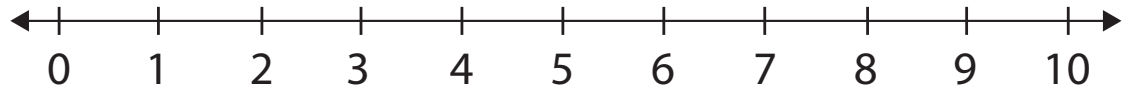


Parent tip: First ask your child to make one big jump from 0 to 4. Then ask him to make tiny jumps to move 3 spaces ahead and circle the number he lands on.

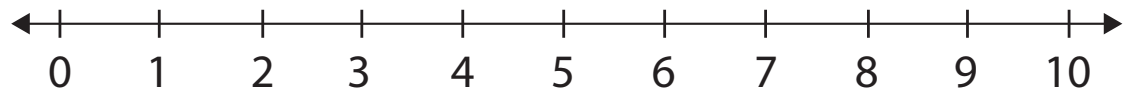
$6 + 3 = \underline{\quad}$



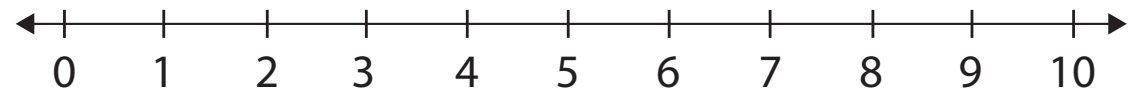
$4 + 4 = \underline{\quad}$



$1 + 5 = \underline{\quad}$



$8 + 2 = \underline{\quad}$



$7 + 3 = \underline{\quad}$

