
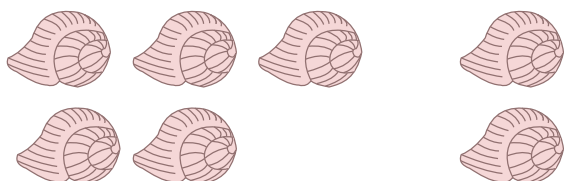


Number Jumble


This math homework is mixed up. Can you match each number sentence to the correct picture equation?



$6 - 2 = \underline{\hspace{2cm}}$




$2 + 3 = \underline{\hspace{2cm}}$



$4 + 2 = \underline{\hspace{2cm}}$



$5 - 3 = \underline{\hspace{2cm}}$



$5 + 2 = \underline{\hspace{2cm}}$



$7 - 5 = \underline{\hspace{2cm}}$