


# Naming Quadrilaterals

Quadrilaterals are polygons with four edges (sides), four vertices (corners).  
Choose the word from the word bank and write the correct name of each quadrilateral.

**Kite**




---

**Rhombus**



---

**Trapezoid**




---

**Rectangle**




---

**Square**



---

**Parallelogram**



---