


## MULTIPLY THE NUMBERS


Tiny Ants are collecting apples for their party. Multiply the numbers in each box and color the apple with the correct answer.




$3 \times 7 = \dots\dots\dots$




$8 \times 3 = \dots\dots\dots$




$2 \times 2 = \dots\dots\dots$




$5 \times 4 = \dots\dots\dots$




$6 \times 2 = \dots\dots\dots$




$7 \times 8 = \dots\dots\dots$



$9 \times 9 = \dots\dots\dots$



$4 \times 7 = \dots\dots\dots$



$9 \times 7 = \dots\dots\dots$

