



Multiplication:

Repeated Addition



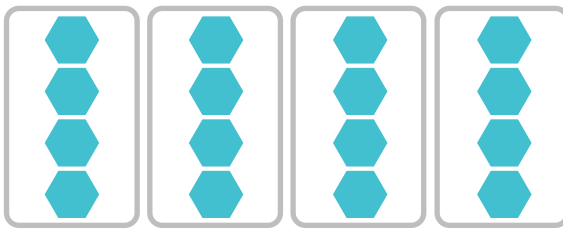
Directions: You can use repeated addition to find the total number of objects in equal groups.

For example, look at this problem.




3 equal groups of 2 apples can be represented by this repeated addition equation: $2 + 2 + 2 = 6$.

Use repeated addition to find the total number of objects in each question below.




1. Repeated addition equation: _____ = _____



2. Repeated addition equation: _____ = _____



3. Repeated addition equation: _____ = _____



4. Repeated addition equation: _____ = _____